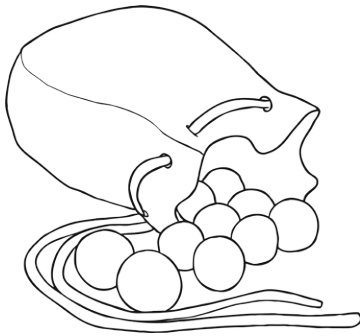
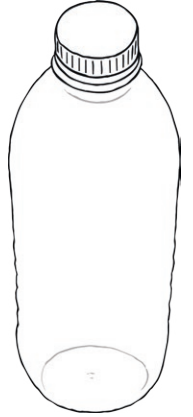


# One-Step Multiplication


## Word Problems

1. A teacher asks some children to arrange some chairs into 12 rows of eight chairs. How many chairs will be laid out? \_\_\_\_\_
2. A crate contains 32 packs of four water bottles. How many bottles are there on each crate? \_\_\_\_\_
3. A photo album contains 28 pages. Each page can hold six photos. How many photos can each album hold? \_\_\_\_\_
4. A grocer has 37 packs of bananas. Each pack contains seven bananas. How many bananas are in the packs? \_\_\_\_\_



5. Marbles are sold in bags of 25. A shop has 16 bags. How many marbles are there altogether? \_\_\_\_\_
6. A badminton tournament is arranged at a local sports hall. There are 5 courts. Each court is allocated 18 shuttlecocks. How many shuttlecocks are allocated to the 5 courts? \_\_\_\_\_

7. Envelopes are sold in packs of ten. A supplier has 107 packs of envelopes. How many envelopes has the supplier? \_\_\_\_\_
8. A library has 50 shelves. Each shelf has 38 books. How many books are there in the library? \_\_\_\_\_



# One-Step Multiplication

## Word Problems **Answers**

1. A teacher asks some children to arrange some chairs into 12 rows of eight chairs. How many chairs will be laid out? **96 chairs**
2. A crate contains 32 packs of four water bottles. How many bottles are there on each crate? **128 bottles**
3. A photo album contains 28 pages. Each page can hold six photos. How many photos can each album hold? **168 photos**
4. A grocer has 37 packs of bananas. Each pack contains seven bananas. How many bananas are in the packs? **259 bananas**
5. Marbles are sold in bags of 25. A shop has 16 bags. How many marbles are there altogether? **400 marbles**
6. A badminton tournament is arranged at a local sports hall. There are 5 courts. Each court is allocated 18 shuttlecocks. How many shuttlecocks are allocated to the 5 courts? **90 shuttlecocks**
7. Envelopes are sold in packs of ten. A supplier has 107 packs of envelopes. How many envelopes has the supplier? **1070 envelopes**
8. A library has 50 shelves. Each shelf has 38 books. How many books are there in the library? **1900 books**